

Hello!

Today's WALT recall what we have learnt about directions

You should work for 45 minutes to an hour on this lesson.

You don't need to print anything - just write on paper as if you were writing in your Maths book.

Remember to answer in full sentences.



## Mental Maths

Challenge:  
complete it in 2  
minutes

Don't worry if you  
cannot.



Fill in the missing number to make these add up to 20.

$$10 + \square + 9 = 20$$

$$10 + \square + 7 = 20$$

$$10 + \square + 5 = 20$$

$$10 + \square + 8 = 20$$

$$10 + \square + 2 = 20$$

$$10 + \square + 6 = 20$$

$$10 + \square + 3 = 20$$

$$10 + \square + 1 = 20$$



Fill in the missing number (or numbers) to make these add up to 20.

$$8 + \square + 10 = 20$$

$$5 + 8 + \square = 20$$

$$3 + \square + 12 = 20$$

$$6 + 1 + \square = 20$$

$$\square + 6 + \square = 20$$

$$\square + 11 + \square = 20$$

$$14 + \square + \square = 20$$

$$9 + \square + \square = 20$$



# Directions in the City



1. Write the missing directions to get to the right shops. How do you get to...?

- The butchers: Go straight ahead. Take the first left. Turn left. It's on the right.
- The bakery: Go straight ahead. \_\_\_\_\_
- The grocer's: \_\_\_\_\_
- The pharmacy: \_\_\_\_\_
- The kiosk: \_\_\_\_\_
- The supermarket: \_\_\_\_\_

2. Choose a shop and write the directions. Your partner has to work out where you're going!

---

---

---

---

---



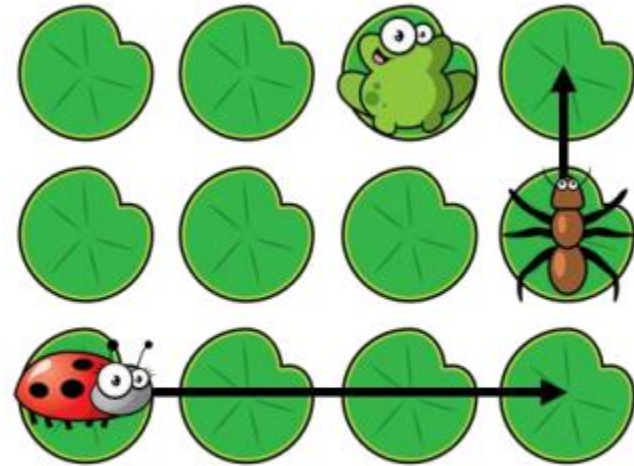
# Year 2

## Position and Direction


Name \_\_\_\_\_



2



1



Use the words to complete the sentences.

above      below      right      left

The sheep is \_\_\_\_\_ the bird.

The bee is to the \_\_\_\_\_ of the bird.

The spider is \_\_\_\_\_ the bee.



3 marks

Complete the sentences.

The ladybird moves \_\_\_\_\_ lily pads to the right.

The ant moves 1 lily pad \_\_\_\_\_.

The frog moves 2 lily pads to the left.

Draw an X to show where the frog is now.



2 marks



1 mark



3 Here is an octopus.



Tick the image of the octopus after a quarter turn clockwise.



1 mark

What could the octopus do to get back to the start?

Half turn

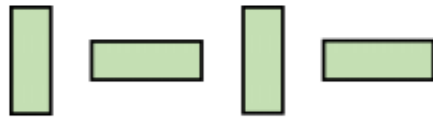
Quarter turn clockwise

Quarter turn anti-clockwise

Three-quarter turn anti-clockwise

1 mark

4 Draw the next two shapes in each pattern.



3 marks

Circle how confident you feel with position & direction.

1      2      3      4      5  
Not      Very  
confident      confident

