

Hello!

Today's WALT add 2 digit numbers



You should work for 45 minutes to an hour on this lesson.

You don't need to print anything - just write on paper as if you were writing in your Maths book.

Remember to answer in full sentences.

1

What number is represented?

Tens	Ones
	

2

Complete the sentences.

Tia has 8 blocks.



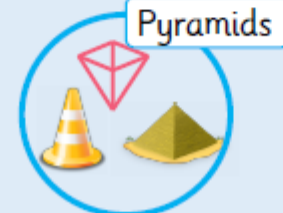

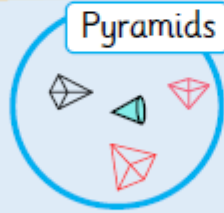
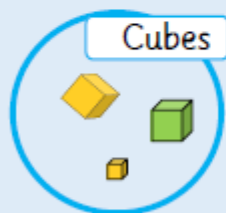
She puts on 7 more.
How many blocks does Tia have now?

4 blocks are added but 3 fall down.
How many are left?



3

Have the shapes been sorted correctly?

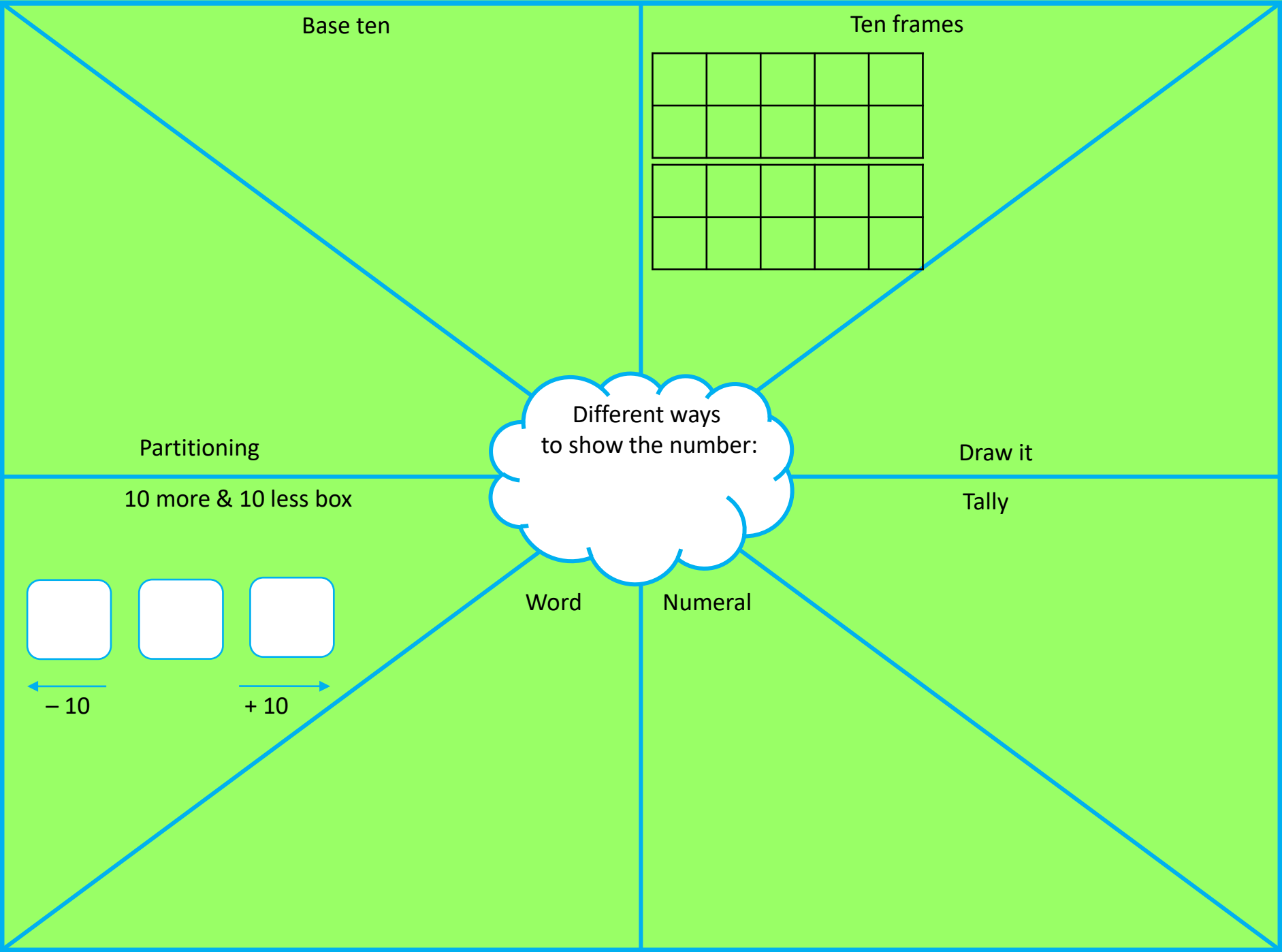


4

Calculate.

= 2 + 3

= three add nine



$2 + 1 = 3$

$4 + 1 = 5$

$2 + 3 = 5$

$1 + 4 = 5$

$3 + 2 = 5$

$4 + 1 = 5$

$3 + 3 = 6$

$2 + 4 = 6$

$4 + 2 = 6$

$3 + 3 = 6$

$1 + 5 = 6$

$2 + 4 = 6$

$5 + 2 = 7$

$3 + 4 = 7$

$4 + 3 = 7$

$5 + 2 = 7$

$2 + 5 = 7$

$3 + 4 = 7$

$16 + 25 =$

$46 + 34 =$

$67 + 28 =$

Miss Khimasia went for a long walk. She saw 29 robins and 12 pigeons. How many birds did she see in total?

Mrs Brooks went to the supermarket. She bought 15 apples and 29 pears for her crumble. How much fruit did she buy altogether?

Mr Hirani went to drop his car at the garage. He saw 3 9 blue cars and
6 4 red cars. How many cars did he see in total?

Challenge

Write your own worded problem