

Hello!

Today's WALT tell the time to quarter hour

You should work for 45 minutes to an hour on this lesson.

You don't need to print anything - just write on paper as if you were writing in your Maths book.

Remember to answer in full sentences.



$34 - 19 =$

$53 - 20 =$

$71 - 43 =$



# Unit 13

## Time



In this unit we will ...

- ⚡ Tell the time to the hour, the half hour and quarter hour
- ⚡ Tell the time to five minutes
- ⚡ Find start and end times
- ⚡ Find out how long something lasts
- ⚡ Compare amounts of time

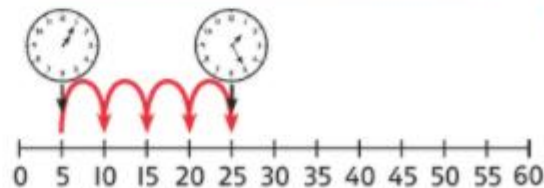
Do you remember which is the hour hand and which is the minute hand?



We will need some maths words.  
Have you heard any of these before?

o'clock      half past  
quarter past      quarter to  
minute hand      hour hand  
duration

We can count forwards or backwards on a number line to help us solve time problems. How many minutes between five minutes past 1 and twenty-five minutes past 1?



# Make a clock


- There is a clock template for you to make if it will help.
- You will need scissors, glue and a split pin.




# Telling time to the quarter hour

Discover



1 a) What time will the  be fed?

b) What time will the  be fed?

The Tiger will be fed at

---

---

---

---

---

The penguin will be fed at

---

---

---



## Think together

- 1 a) What time does the reptile house open?

The reptile house opens at

\_\_\_\_\_.

- b) What time does it close?

The reptile house closes at

\_\_\_\_\_.



I will work out what the minute hand says first.




- 2 What times can you meet the macaws?

You can meet the macaws at

\_\_\_\_\_ and



\_\_\_\_\_.





Fill in the missing word.



## Telling time to the quarter hour

1  quarter past 4       quarter to 2

Colour each quarter past or quarter to.


 quarter past 11       quarter to 5

2 Match each clock with the right time.


quarter past 2



quarter to 11



quarter past 7



half past 2



# Complete the table.

The minute hand is pointing to \_\_\_\_  
The hour hand is just after \_\_\_\_  
The time is *quarter* \_\_\_\_ *seven*



The minute hand is pointing to three.  
The hour hand is just after six.  
The time is *quarter past six*.



The minute hand is pointing to \_\_\_\_  
The hour hand is just before \_\_\_\_.  
The time is *quarter* \_\_\_\_ *two*.



The minute hand is pointing to nine.  
The hour hand is just \_\_\_\_ twelve.  
The time is *quarter to twelve*.





## Miss Khimasia's Maths Group Challenge

How many quarters of an hour are between 7 o'clock and 9 o'clock.

Explain how you found the answer.

There are

---

---

---

---

---

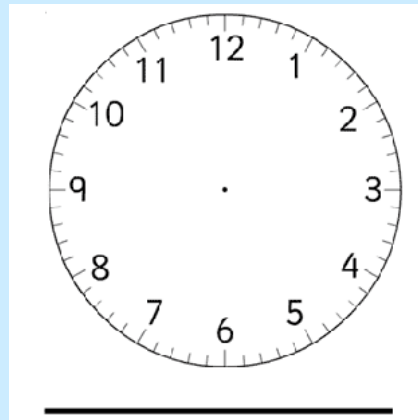
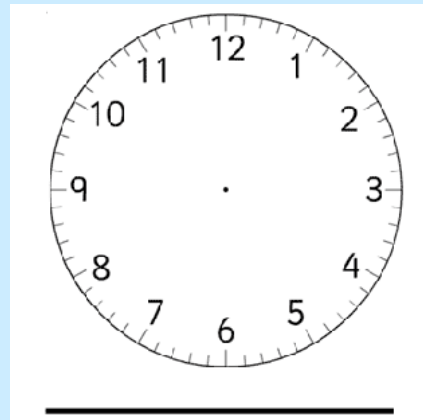
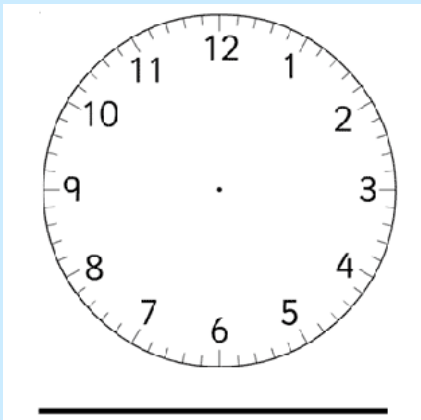
---

---

---

---

---




Hint: use the blank clocks to draw the times.



## Mr Hirani's Maths Group Challenge

The train to Blackpool leaves at quarter past and quarter to every hour.

Make a list of the times of the trains  
Oliver can catch if he gets to the train  
station between 2 o'clock and half past 4



---

---

---

---

---

---

---

---

---

---



