

Hello!

Today's WALT tell the time to 5 minutes

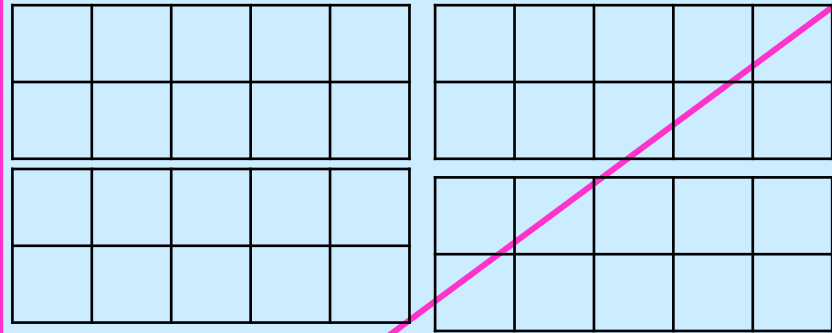
You should work for 45 minutes to an hour on this lesson.

You don't need to print anything - just write on paper as if you were writing in your Maths book.

Remember to answer in full sentences.

Base ten

Ten frames




Different ways
to show the number:

Partitioning

Draw it

10 more & 10 less box

Tally



Word

Numeral

Talking with a grown=up

Interactive Clock | Telling Time | Analog & Digital | Toy Theater - go on
this clock and move the minute hand

What do you notice?

Model how up to number 6 it's past the hour and after 6 it's to the hour

Do lots of examples.

Discover

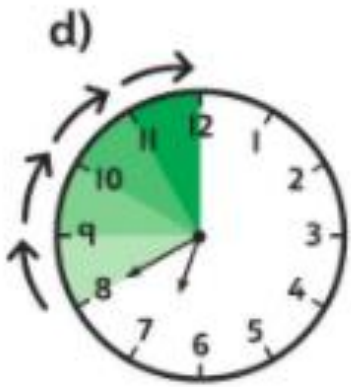
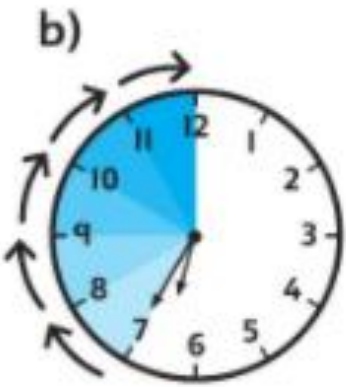
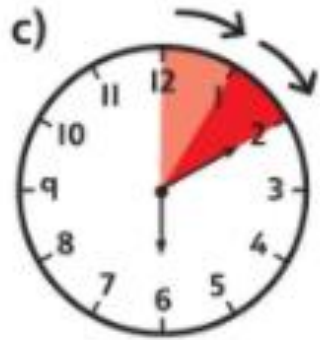
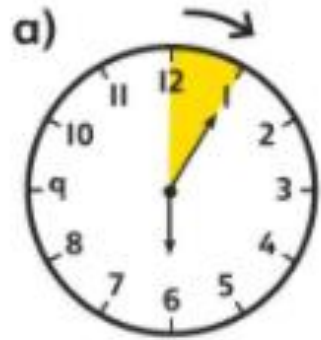


What is happening in the picture?

The bus is due to arrive in 5 minutes. What time will the bus arrive?

Think together

I What time is it?



These times are something "past 6".



These times are something "to 7".

a =

b =

c =


d =

2 What time is it?

a)




c)



b)



d)



a =


b =

c =


d =

Match the times to the correct clock.


20 past 6




5 to 9



10 to 2




20 to 11



25 to 3




10 past 1



Telling time to 5 minutes

1 Match the activities with the correct times.



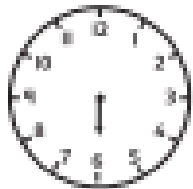
ten to 7

twenty-five
past 8


twenty past 3

ten past 5

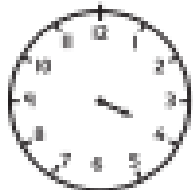
2 Draw the minute hand for each time.




five past 6



twenty-five past 10




ten to 4



twenty-five to 11

Miss Khimasia's Maths Group Challenge



Dora: It is ten to one.

Amir: It is ten past ten.

Alex: It is ten to two.

Who is correct? Explain your answer.

_____ is correct because

Mr Hirani's Maths Group Challenge



Four lots of 5 minutes is
the same as quarter of
an hour.

Do you agree with Rosie? Explain why.

Sentence start: I agree/I disagree because

Super challenge

Sophia starts her Maths questions at 10 past 11



Each question takes her 5 minutes to complete.

She completes 7 questions.

What time does Sophia finish her Maths questions?

Explain how you found the answer.
